

Year 1 Spring 1 Maths Activity Mat 3

Section 1

Put these numbers in order, starting with the highest.

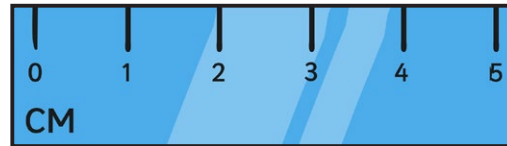
7 3 9 5 1

<input type="text"/>	<input type="text"/>	<input type="text"/>	<input type="text"/>	<input type="text"/>
----------------------	----------------------	----------------------	----------------------	----------------------



Section 2

How long is the snake?



Section 3

$10 + 3 = \square$

$10 - 4 = \square$

$10 + 5 = \square$

Section 4


Michael has £5 and is given £3 more.

How much does he have now?



Section 5

Share the biscuits evenly into 2. How many are in each box?




Section 6

If $13 = 10 + 3$, what is 15?

Section 7

How many sweets can I buy for 10p?



Section 8

What number is next?

20, 30, 40,



Year 1 Spring 1 Maths Activity Mat 3

Section 1

Put these numbers in order, starting with the highest.

14 12 21 4 11 18



Section 2

How long is the snake?



Section 3

$12 + 5 = \square$

$12 - 6 = \square$

$12 + 8 = \square$

Section 4


Layla has £8 and is given £5 more.

How much does she have now?



Section 5

Share the biscuits evenly into 2 boxes. How many are in each box?




Section 6

If $13 = 10 + 3$, what is 19?

Section 7

How many sweets can I buy for 16p?



Section 8

What number is next?

80, 70, 60,



Year 1 Spring 1 Maths Activity Mat 3

Section 1

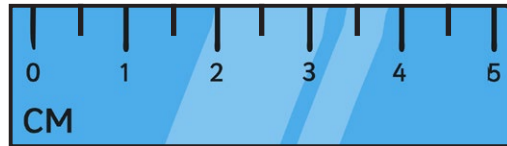
Put these numbers in order, starting with the highest.

15 22 17 32 37 29



Section 2

How long is the snake?



Section 3

$18 - 9 = \square$

$18 + 7 = \square$

$18 - 11 = \square$


Section 4

Belle has £9 and is given £8 more. How much does she have now?



Section 5

Share the biscuits evenly into 2 boxes. How many are in each box?



Section 6

If $13 = 10 + 3$, what is 31 ?

Section 7

How many chocolate bars can I buy for 45p?



Section 8

What number is next?

55, 50, 45, 40,



Year 1 Spring 1 Maths Activity Mat 3 Answers

Section 1

Put these numbers in order, starting with the highest.

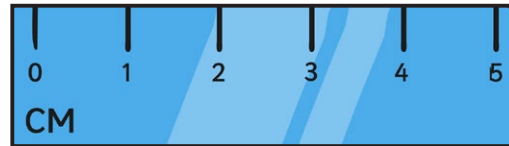
7 3 9 5 1

9 7 5 3 1



Section 2

How long is the snake?



3cm

Section 3

$$10 + 3 = 13$$

$$10 - 4 = 6$$

$$10 + 5 = 15$$

Section 4

Michael has £5 and is given £3 more.


How much does he have now?



£8

Section 5

Share the biscuits evenly into 2. How many are in each box?



5


Section 6

If $13 = 10 + 3$, what is 15?

$$10 + 5$$

Section 7

How many sweets can I buy for 10p?



5

Section 8

What number is next?

20, 30, 40, 50



Year 1 Spring 1 Maths Activity Mat 3

Section 1

Put these numbers in order, starting with the highest.

14 12 21 4 11 18

21 18 14 12 11 4



Section 2

How long is the snake?



8cm

Section 3

$$12 + 5 = 17$$

$$12 - 6 = 6$$

$$12 + 8 = 20$$

Section 4


Layla has £8 and is given £5 more.

How much does she have now?



Section 5

Share the biscuits evenly into 2 boxes. How many are in each box?



7


Section 6

If $13 = 10 + 3$, what is 19?

$$10 + 9$$

Section 7

How many sweets can I buy for 16p?



8

Section 8

What number is next?

80, 70, 60, 50



Year 1 Spring 1 Maths Activity Mat 3 Answers

Section 1

Put these numbers in order, starting with the highest.

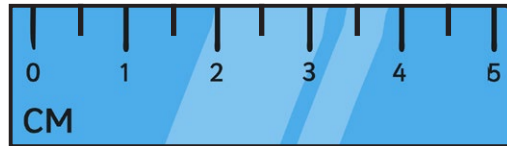
15 22 17 32 37 29

37 32 29 22 17 15



Section 2

How long is the snake?



4.5cm

Section 3

$$18 - 9 = 9$$

$$18 + 7 = 25$$

$$18 - 11 = 7$$

Section 4


Belle has £9 and is given £8 more. How much does she have now?



£17

Section 5

Share the biscuits evenly into 2 boxes. How many are in each box?



11

Section 6

If $13 = 10 + 3$, what is 31 ?

$30 + 1$

Section 7

How many chocolate bars can I buy for 45p?



9

Section 8

What number is next?

55, 50, 45, 40, 35

