

Year 1 Spring 1 Maths Activity Mat 4


Section 1

What number is 6 less than 11?



Section 2

What time is on the clock?



Section 3

Add the coins.



Section 4


What is the underlined digit worth?

17

Section 5

Draw 3 more flowers.

How many flowers do you have altogether?




Section 6

If $17 = 10 + 7$, what is 12?

Section 7

Tick the largest bear.



Section 8

$$5 + \square = 8$$



Year 1 Spring 1 Maths Activity Mat 4


Section 1

What number is 8 less than 15?



Section 2

What time is on the clock?



Section 3

Add the coins.



Section 4


What is the underlined digit worth?

24

Section 5

Draw 4 more flowers.

How many flowers do you have altogether?




Section 6

If $17 = 10 + 7$, what is 27?

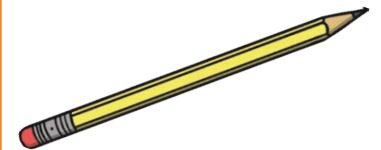
Section 7

Tick the smallest bear.



Section 8

$$12 + \square = 19$$



Year 1 Spring 1 Maths Activity Mat 4


Section 1

18 is 11 lower than what number?



Section 2

What time is on the clock?



Section 3

Add the coins.



Section 4


What is the underlined digit worth?

48

Section 5

Draw 8 more flowers.

How many flowers do you have altogether?



Section 6

If $17 = 10 + 7$, what is 46 ?

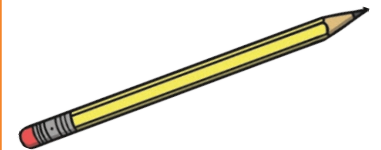
Section 7

Tick the second largest bear.



Section 8

$$12 + \square = 25$$



Year 1 Spring 1 Maths Activity Mat 4 Answers

Section 1


What number is 6 less than 11?

5



Section 2

What time is on the clock?



3 o'clock

Section 3

Add the coins.



10p

Section 4

What is the underlined digit worth?


17

10

Section 5

Draw 3 more flowers.

How many flowers do you have altogether?



9


Section 6

If $17 = 10 + 7$, what is 12?

$10 + 2$

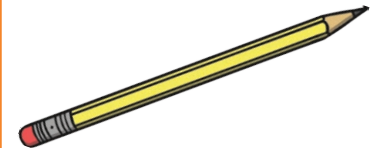
Section 7

Tick the largest bear.



Section 8

$$5 + \boxed{3} = 8$$



Year 1 Spring 1 Maths Activity Mat 4 Answers

Section 1


What number is 8 less than 15?

7



Section 2

What time is on the clock?



10 o'clock

Section 3

Add the coins.



17p

Section 4

What is the underlined digit worth?

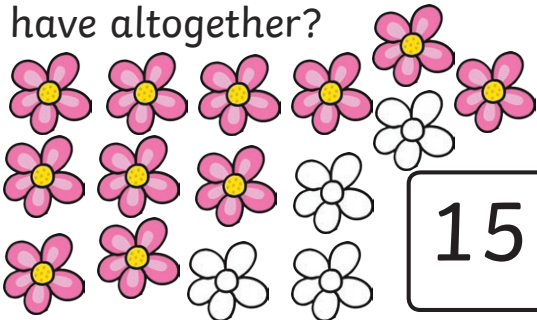
24

20

Section 5

Draw 4 more flowers.

How many flowers do you have altogether?



15


Section 6

If $17 = 10 + 7$, what is 27?

$20 + 7$

Section 7

Tick the smallest bear.



Section 8

$$12 + \boxed{7} = 19$$



Year 1 Spring 1 Maths Activity Mat 4 Answers

Section 1


18 is 11 lower than what number?

29



Section 2

What time is on the clock?



half past 7

Section 3

Add the coins.



26p

Section 4

What is the underlined digit worth?

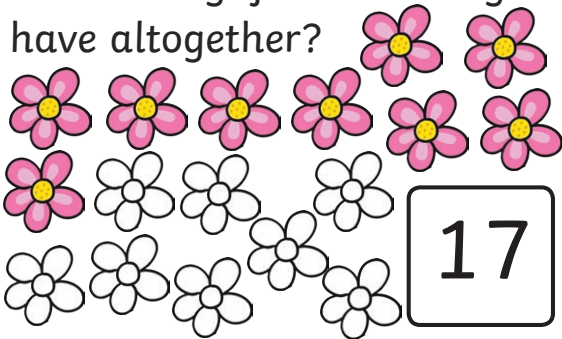
48

40

Section 5

Draw 8 more flowers.

How many flowers do you have altogether?



17


Section 6

If $17 = 10 + 7$, what is 46 ?

$40 + 6$

Section 7

Tick the second largest bear.



Section 8

$$12 + \boxed{13} = 25$$

